

GCSE Mathematics - Paper 3 (Foundation tier)

J560/03 Paper 3 Mathematics (Foundation Tier)

Question Set 6

1

Alex has a number game.
He must put down tiles to make two calculations with the same answer.

Here is what Alex put down.

$$2 - 3 \times 2 = 3 - 5$$

Is he correct?
Show how you decide.

Alex is because.....
.....
..... [2]

2

- (a) Jo walks every day.
This week she walked an average of 2300 steps a day.
Next week she plans to increase this by 15%.

Work out how many steps she plans to walk **in total** next week?

(a) [4]

- (b) Jo buys a pair of walking boots for £63 in a sale.
She saves $\frac{1}{10}$ of the original price of the boots.

Work out how much money Jo saves.

(b) £ [3]

- 3 Mia has knitted 3 left-hand gloves: 1 blue, 1 green, and 1 red.
She has knitted 2 right-hand gloves: 1 green and 1 red.

She chooses a left-hand glove and a right-hand glove at random to make a pair of gloves.

Mia says

I have a probability of $\frac{2}{3}$ of choosing a pair of gloves of the same colour as there is a red pair and a green pair and there are three colours.

Is she correct?

Show how you decide.

Mia is because

..... [3]

4 $5(2x + 1) + c(x + d) = 12x - 1$

Work out the value of c and the value of d .

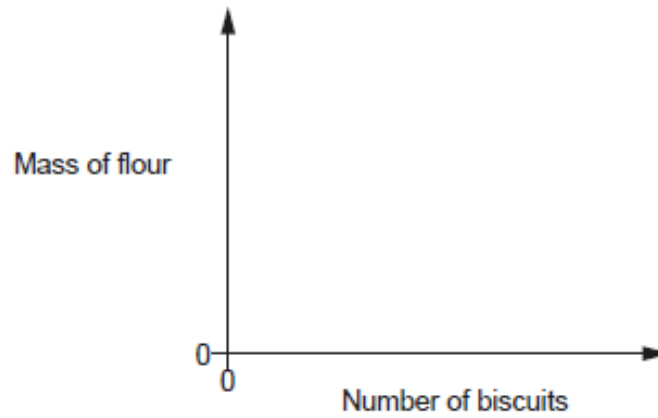
$c = \dots\dots\dots$

$d = \dots\dots\dots$ [5]

5

- (a) The mass of flour used in a recipe doubles as the number of biscuits made doubles.

On the axes below, sketch a graph to show this relationship.



[2]

- (b) Here are some of the ingredients for a recipe to make 10 biscuits.

To make 10 biscuits:

120g butter

100g sugar

Jane followed the recipe and used 432 g of butter.
All of the sugar used came from a new 2 kg bag.

- (i) Find the number of biscuits she made.

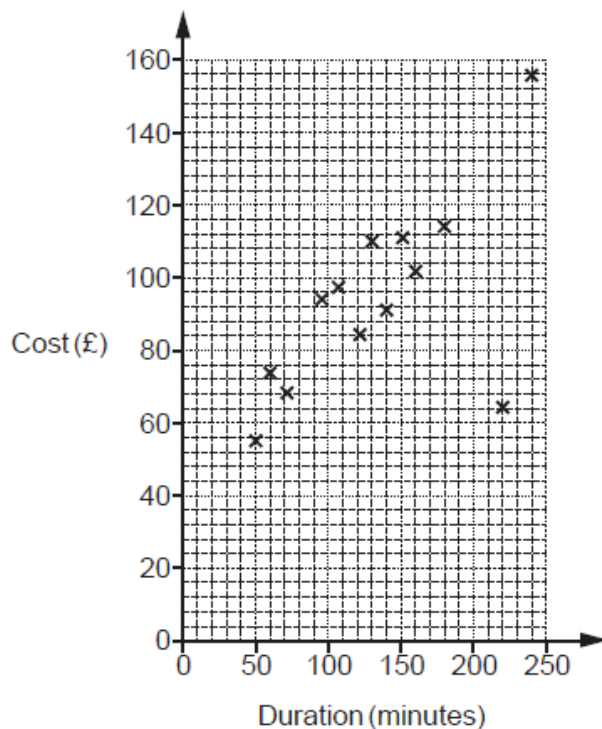
(b)(i) [3]

- (ii) Find the mass of the sugar, in grams, that Jane has left in the bag.

(ii) g [3]

6

A travel agent records the duration and cost of the 15 flights he sold on one day. The data for the first 13 flights are plotted on the scatter diagram.



(a) The data for the final two flights is:

Duration	210 minutes	1 hour 40 minutes
Cost	£130	£80

Plot these flights on the scatter diagram. [2]

(b) The cost of one of the 15 flights had been discounted in a sale.

Circle the most likely flight on the scatter diagram. [1]

(c) (i) Draw a line of best fit on the scatter diagram. [1]

(ii) Use your line of best fit to estimate the duration of a flight costing £90.

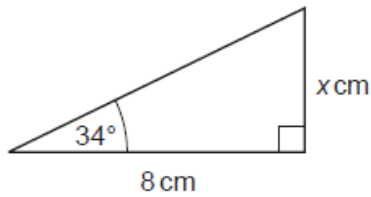
(c)(ii) minutes [1]

(d) Explain why the travel agent should not use his records to estimate the cost of a 7 hour flight.

.....

 [1]

- 7 18 Here is a right-angled triangle.



Not to scale

Use trigonometry to work out the value of x .

$x = \dots\dots\dots$ [3]

- 8 (a) Work out the size of the exterior angle of a regular 12-sided polygon.

(a) $\dots\dots\dots^\circ$ [2]

- (b) Use your answer to part (a) to write down the size of the interior angle of a regular 12-sided polygon.

(b) $\dots\dots\dots^\circ$ [1]

- 9 A truck is used to transport some wood panels.
Each wood panel is a cuboid measuring 2.4 m by 1.2 m by 1.8 cm.
The density of each wood panel is 750 kg/m^3 .

The truck can carry 15 tonnes of these wood panels.

Calculate the maximum number of wood panels that the truck can carry.
Show how you decide.

..... [6]

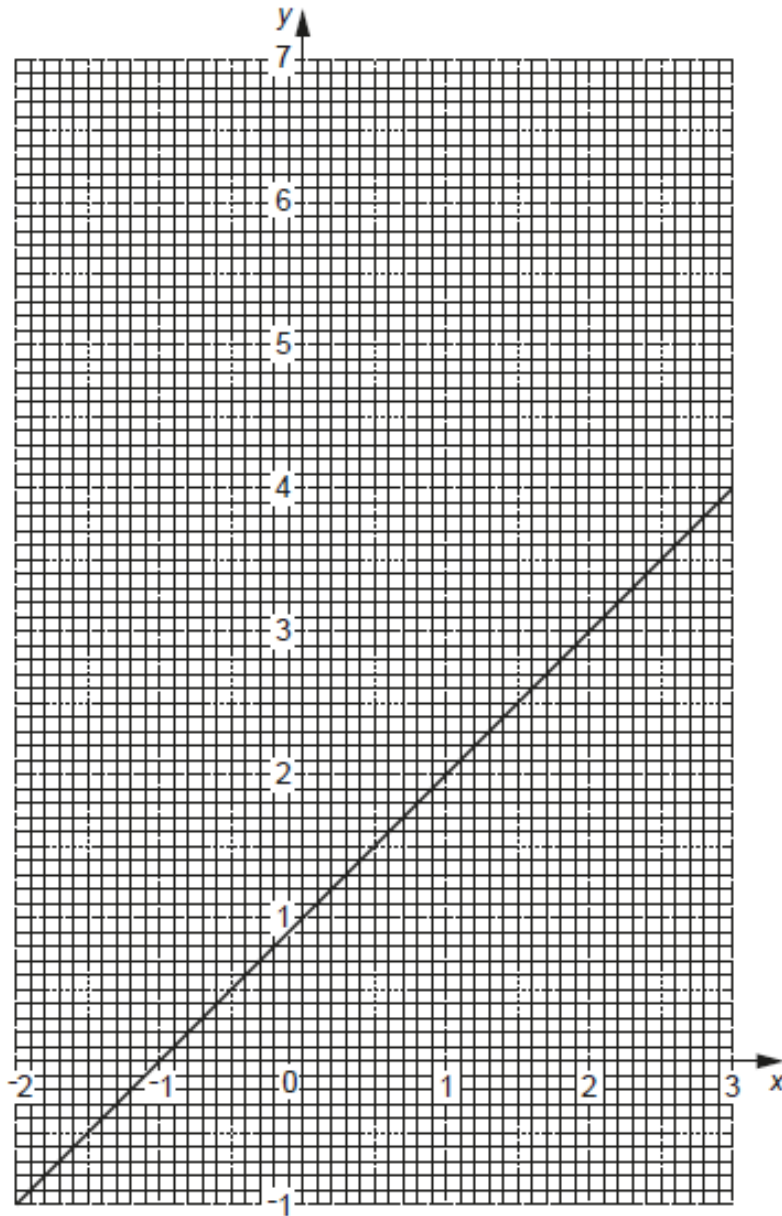
10 (a) Complete this table for $y = x^2 - x$.

x	-2	-1	0	1	2	3
y	6		0		2	6

[2]

(b) The graph of $y = x + 1$ is shown on the grid.

On the same grid, use part (a) to draw the graph of $y = x^2 - x$ for values of x from -2 to 3.



[3]

(c) Write down the x -coordinates of the points where $y = x^2 - x$ and $y = x + 1$ cross.

(c) $x = \dots\dots\dots$ and $x = \dots\dots\dots$ [2]

Total Marks for Question Set 6: 50

OCR

Oxford Cambridge and RSA

Copyright Information

OCR is committed to seeking permission to reproduce all third-party content that it uses in its assessment materials. OCR has attempted to identify and contact all copyright holders whose work is used in this paper. To avoid the issue of disclosure of answer-related information to candidates, all copyright acknowledgements are reproduced in the OCR Copyright Acknowledgements Booklet. This is produced for each series of examinations and is freely available to download from our public website (www.ocr.org.uk) after the live examination series.

If OCR has unwittingly failed to correctly acknowledge or clear any third-party content in this assessment material, OCR will be happy to correct its mistake at the earliest possible opportunity.

For queries or further information please contact The OCR Copyright Team, The Triangle Building, Shaftesbury Road, Cambridge CB2 8EA.

OCR is part of the Cambridge Assessment Group; Cambridge Assessment is the brand name of University of Cambridge Local Examinations Syndicate (UCLES), which is itself a department of the University of Cambridge